


Extra Practice as needed!

1) 331 students went on a field trip. Six buses were filled and 7 students traveled in cars. How many students were in each bus?




Created by H1 Alberto Gongora
from Noun Project

2) Aliyah had \$24 to spend on seven fancy pencils. After buying them she had \$10. How much did each pencil cost?

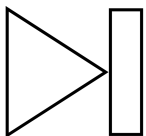


Created by Flatart
from Noun Project

3) The Math Club made some pies to sell at a basketball game to raise money for the new math books. The cafeteria contributed four pies to the sale. Each pie was then cut into five pieces and sold. There were a total of 60 pieces to sell. How many pies did the club make?



Created by HeadsOfBirds
from Noun Project



Created by Viktor Vorobyev
from Noun Project

4) The sum of three consecutive even numbers is 48. What are the smallest of these numbers? (What does *consecutive* mean?)

5) Kim rented a bike from Bizzy Bikes LLC. It cost \$20 plus \$8 per hour. If Kim paid \$52, then she rented the bike for how many hours?




Created by Paige Wilson
from Noun Project

6) Carlos had \$20 to spend on six burgers. After buying them he had \$2. How much did each burger cost?

7) How old is Mary J Blige if she was 53 years old five years ago?

8) For a field trip 11 students rode in cars and the rest filled eight buses. How many students were in each bus if 315 students?



Created by pool party
from Noun Project